
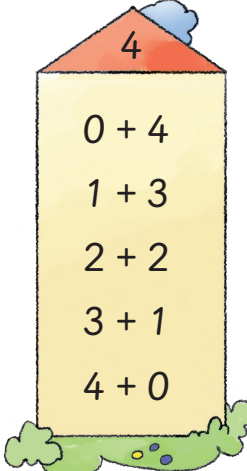







Zahlen bis 6 zerlegen



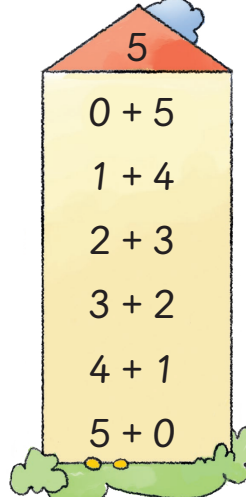





3

$0 + 3$
 $1 + 2$
 $2 + 1$
 $3 + 0$



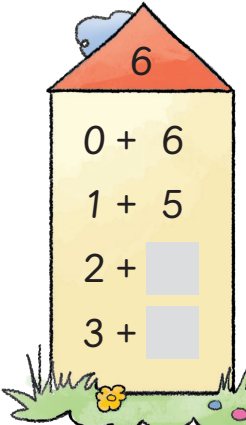






4

$0 + 4$
 $1 + 3$
 $2 + 2$
 $3 + 1$
 $4 + 0$



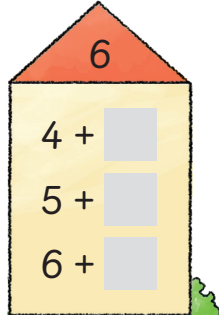




5

$0 + 5$
 $1 + 4$
 $2 + 3$
 $3 + 2$
 $4 + 1$
 $5 + 0$






6

$0 + 6$
 $1 + 5$
 $2 + \square$
 $3 + \square$



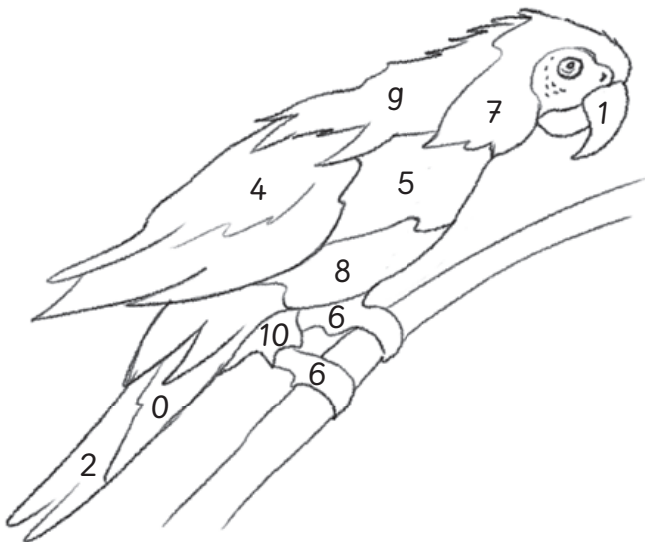
6

$4 + \square$
 $5 + \square$
 $6 + \square$

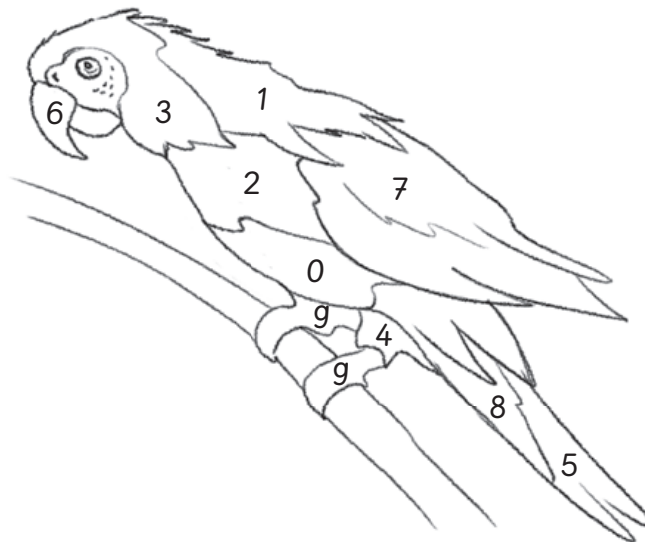




$3 + 6 =$ <input type="text" value="9"/>		$10 - 4 =$ <input type="text"/>	
$3 + 2 =$ <input type="text"/>		$9 - 7 =$ <input type="text"/>	
$2 + 8 =$ <input type="text"/>		$8 - 4 =$ <input type="text"/>	
$5 + 2 =$ <input type="text"/>		$10 - 10 =$ <input type="text"/>	
$2 + 6 =$ <input type="text"/>		$9 - 8 =$ <input type="text"/>	



$8 - 6 =$ <input type="text"/>		$0 + 0 =$ <input type="text"/>	
$8 - 7 =$ <input type="text"/>		$5 + 4 =$ <input type="text"/>	
$6 - 2 =$ <input type="text"/>		$3 + 4 =$ <input type="text"/>	
$9 - 6 =$ <input type="text"/>		$4 + 2 =$ <input type="text"/>	
$10 - 2 =$ <input type="text"/>		$1 + 4 =$ <input type="text"/>	



Wenn die Papageien genau gleich aussehen, hast du die Aufgaben richtig gelöst.