

1 Wirf 5 Plättchen. Ordne, male und schreibe auf.



2 Schreibe auf.

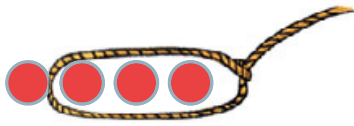
--	--	--	--

3 Male an.




--	--	--	--

1 Lege, nimm weg und rechne.




$$4 - 3 = \square$$




$$\square - \square = \square$$




$$\square - \square = \square$$



$$\square - \square = \square$$



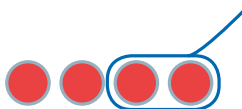
$$\square - \square = \square$$



$$\square - \square = \square$$



2 Lege, male und rechne.



$$4 - 2 = \square$$



$$4 - 3 = \square$$



$$5 - 1 = \square$$



$$5 - 3 = \square$$



$$6 - 4 = \square$$



$$6 - 6 = \square$$