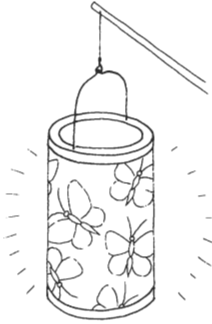
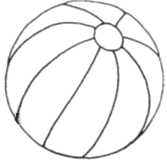
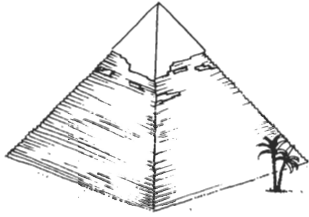


3

Was gehört zusammen? Verbinde.



Quader

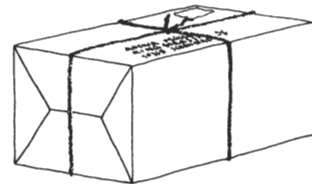
Kugel

Würfel

Zylinder



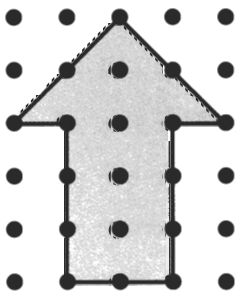
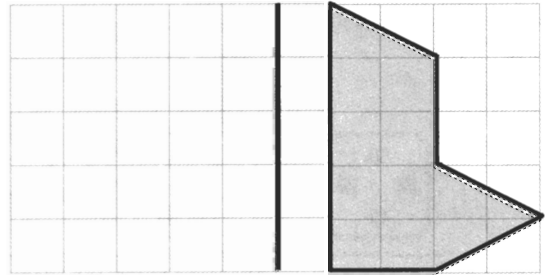
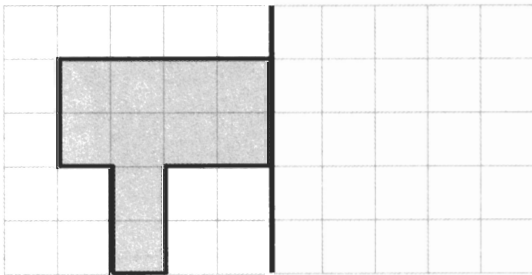
Pyramide

Kegel



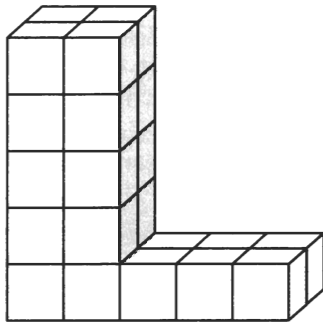
4

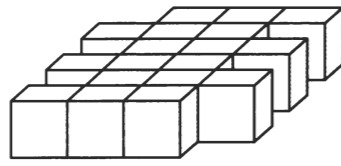
Zeichne das Spiegelbild.

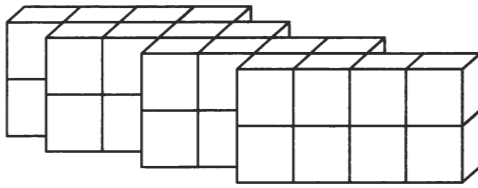


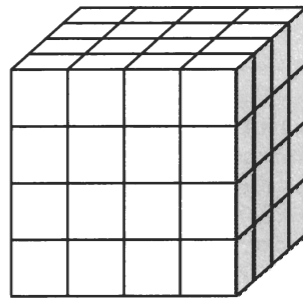
5

Wie viele?







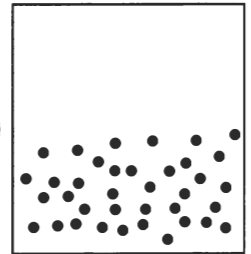
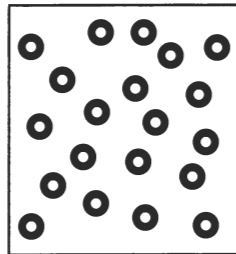
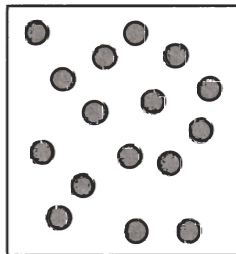
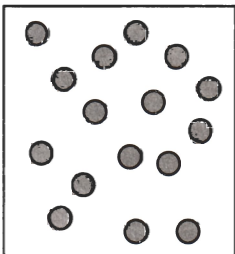
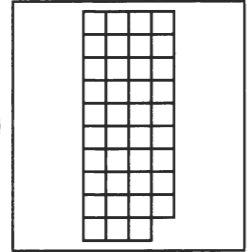
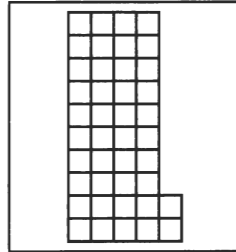








6

>, < oder =?



Rechne aus.

$$\boxed{3} \cdot \boxed{7} = \boxed{}$$

$$\boxed{36} : \boxed{6} = \boxed{}$$

$$\boxed{6} \cdot \boxed{6} = \boxed{}$$

$$\boxed{20} : \boxed{4} = \boxed{}$$

$$\boxed{7} \cdot \boxed{3} = \boxed{}$$

$$\boxed{18} : \boxed{9} = \boxed{}$$

$$\boxed{7} \cdot \boxed{6} = \boxed{}$$

$$\boxed{20} : \boxed{5} = \boxed{}$$


$$\boxed{8} \cdot \boxed{6} = \boxed{}$$

$$\boxed{40} : \boxed{5} = \boxed{}$$

$$\boxed{} : \boxed{8} = \boxed{6}$$

$$\boxed{} \cdot \boxed{5} = \boxed{20}$$

In der Klasse 2 a sind 24 Kinder. Es gibt 16 Mädchen und 8 Jungen.
Alle Kinder sitzen an Gruppentischen mit jeweils 4 Kindern.
Wie viele Gruppentische stehen in der Klasse?



Rechnung:

In der Klasse stehen _____ Gruppentische.